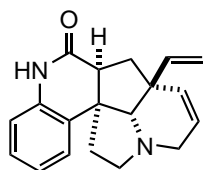
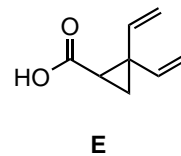
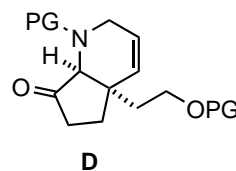
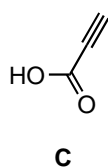
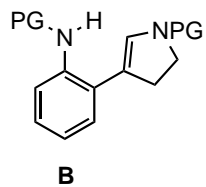
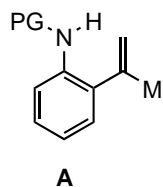
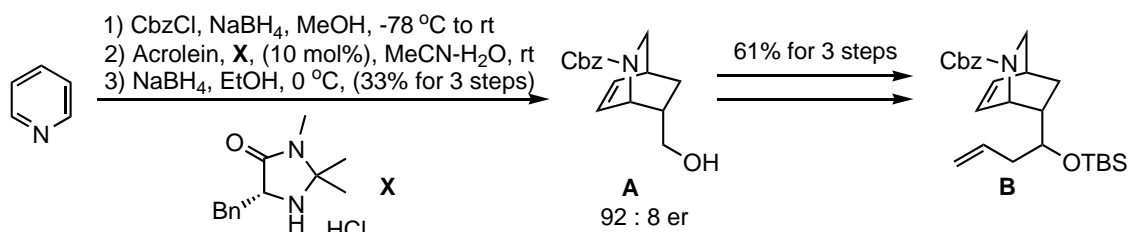


以下の合成中間体のうちの二つを用いて Meloscine の合成計画を立案しなさい。

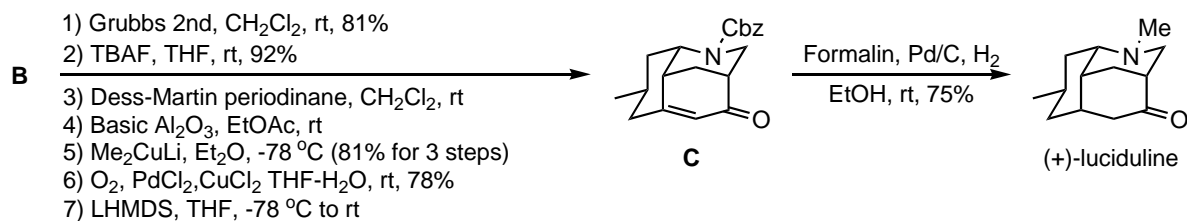
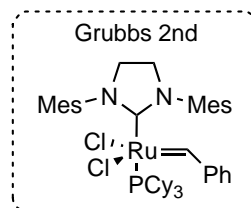
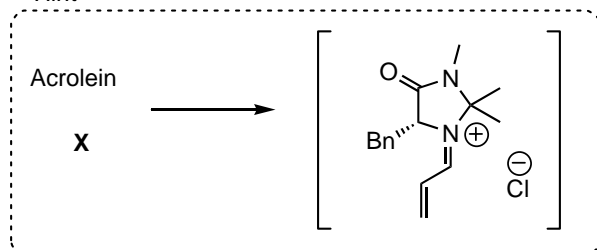


Meloscine

Mukai group *OL* **2011**, 13, 1778
 Curran group *JACS* **2011** ASAP
 Overman group *JACS* **1991**, 113, 2598



Hint



Barbe, G.*; Fiset, D.; Charette, A. B.
J. Org. Chem. **2011**, 76, 5354-5362